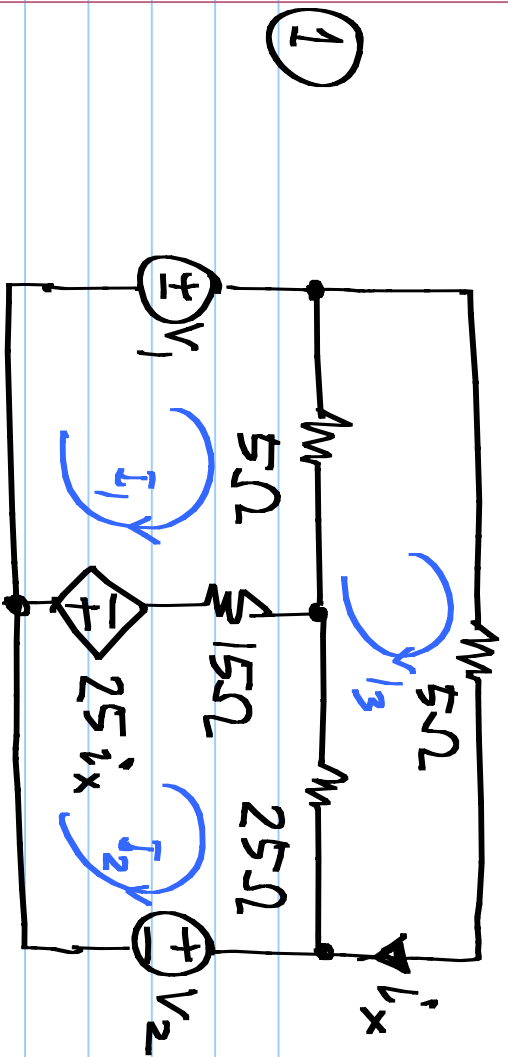


EECE 1010: Electrical and Magnetic Circuits.

Problem set #3 (Due on 14th Feb. 2014)

HKD: Hayt, Kemmerly, and Durbin

Engineering circuit analysis, 8th Edition (Indian)
McGraw Hill 2013



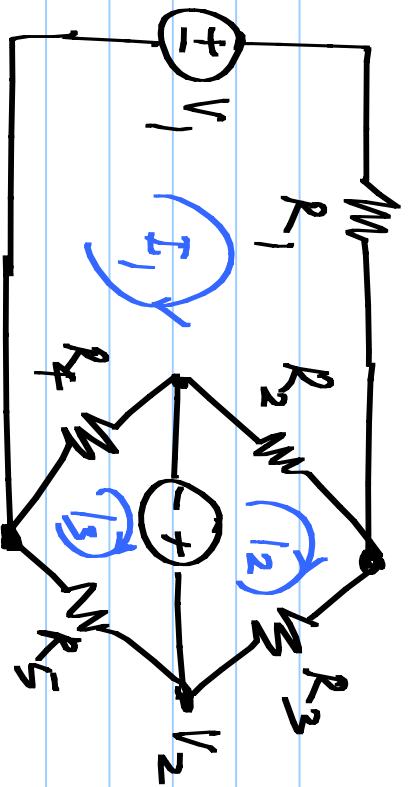
* Set up the mesh analysis eqn. $[R] \cdot \underline{I} = \underline{V}$

* Solve for \underline{I}

* Determine the power dissipated in the 25Ω resistor

* Determine the power dissipated / supplied by all the sources

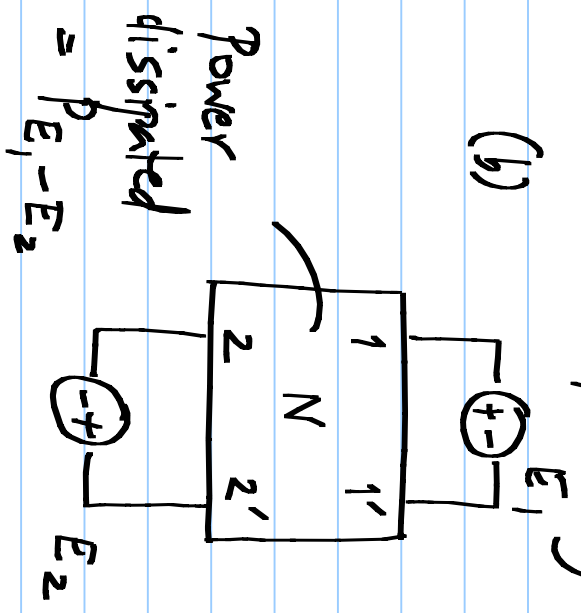
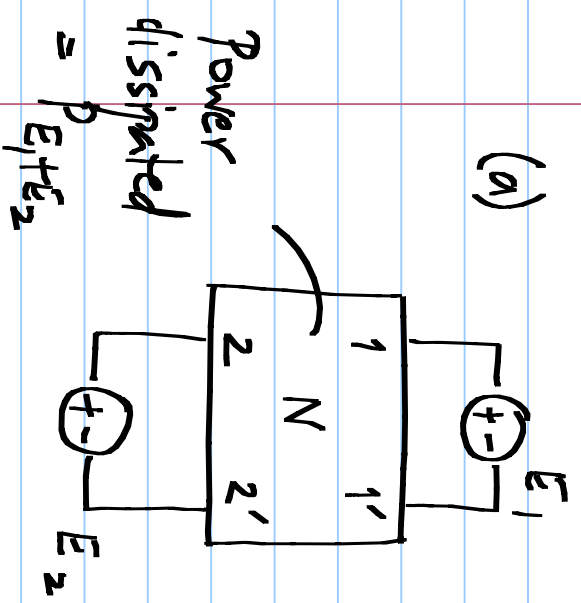
2



The mesh equations for the above circuit are as given below. Determine all component values:

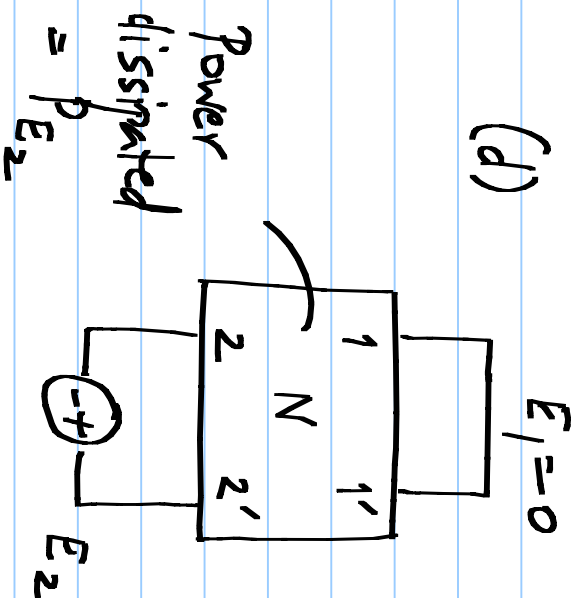
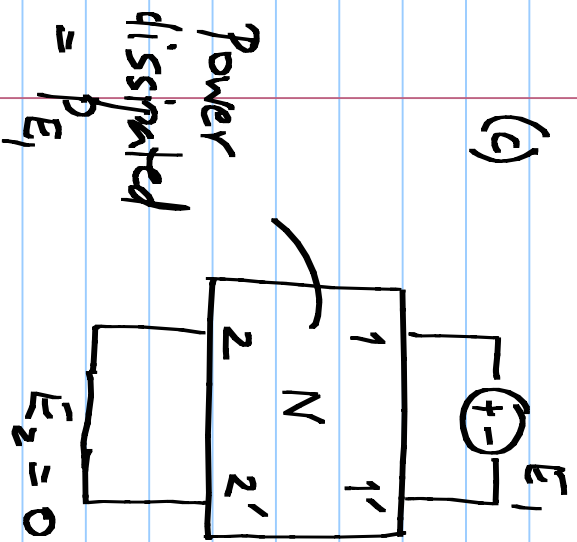
$$\begin{bmatrix} 112\Omega & -90\Omega & -10\Omega \\ -90\Omega & 100\Omega & 0 \\ -10\Omega & 0 & 100\Omega \end{bmatrix} \begin{bmatrix} I_1 \\ I_2 \\ I_3 \end{bmatrix} = \begin{bmatrix} -12V \\ 5V \\ -5V \end{bmatrix}$$

③ Let $P_{E_1+E_2}$ and $P_{E_1-E_2}$ be the powers dissipated in a network N consisting of linear time invariant resistances excited by two voltages E_1 and E_2 in the polarities shown in (a) & (b) respectively.

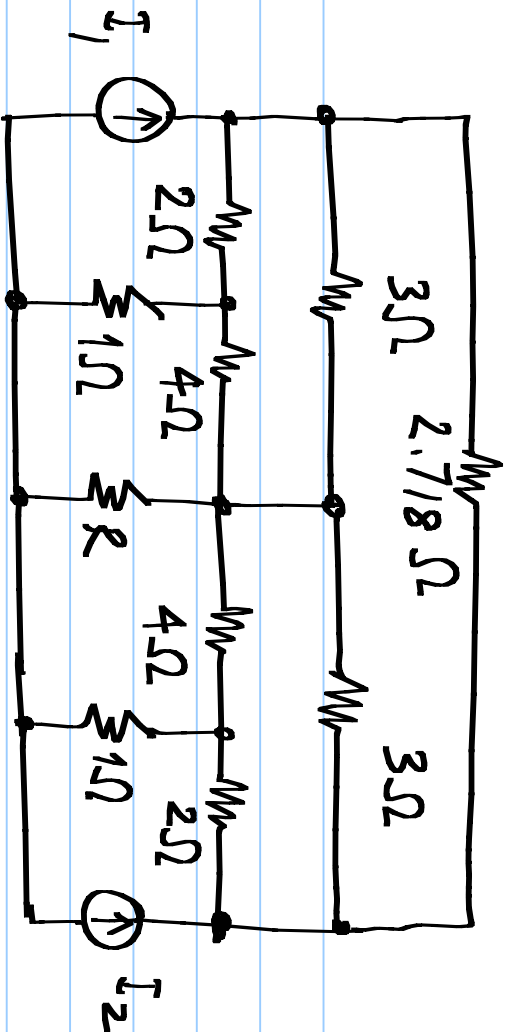


Cont'd

Determine $P_{E_1} + P_{E_2}$ where P_{E_1} and P_{E_2} are the powers dissipated in N when E_1 and E_2 are acting alone as shown in (c) and (d) respectively.

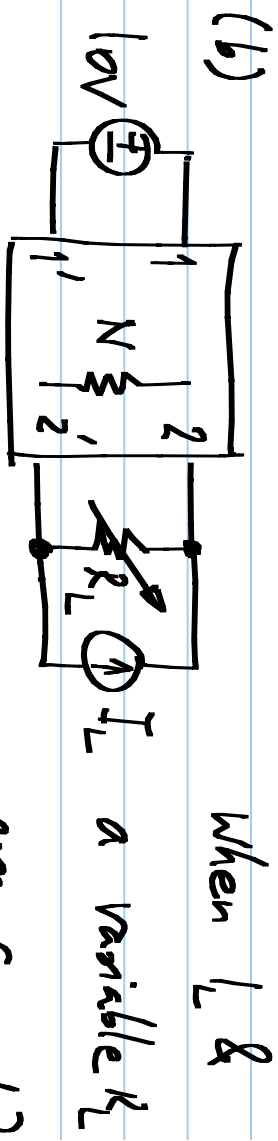


4



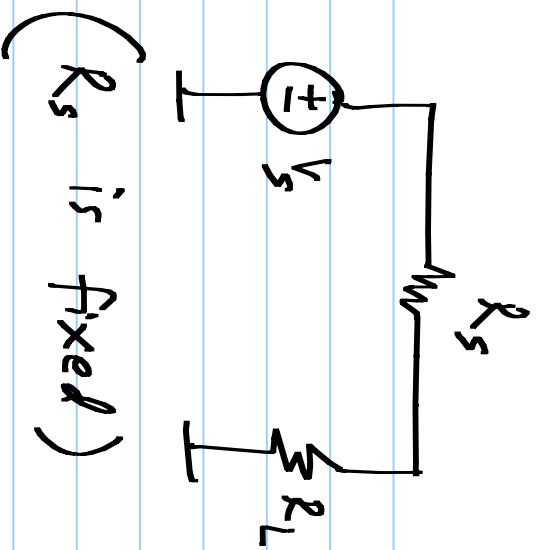
- (a) For $I_1 = I_2 = 1A$, determine R so that it dissipates the maximum power. What is the value of the max. power?
- (b) Repeat the above for $I_1 = 2A$ and $I_2 = -2A$
- (c) Repeat the above for $I_1 = 1A$ and $I_2 = 4A$

⑤ N consists only of resistors and two pairs of terminals 1-1' and 2-2' are brought out (a). When 10V is connected to 1-1' and $R_L = 2\Omega$ is connected to 2-2', the latter draws 2A. When $R_L = 6\Omega$, it draws 1A.



When I_L & R_L are connected to 2-2' and R_L varied, the maximum power dissipated in R_L is 4.5W. Find I_L .

6



Show that the power P_L , dissipated in R_L can be expressed as

$$P_L = P_{\max} (1 - |\Gamma_L|)^2 \quad \text{where}$$

$$\Gamma_L = \frac{R_L - R_s}{R_L + R_s} \quad \text{and } P_{\max} \text{ is}$$

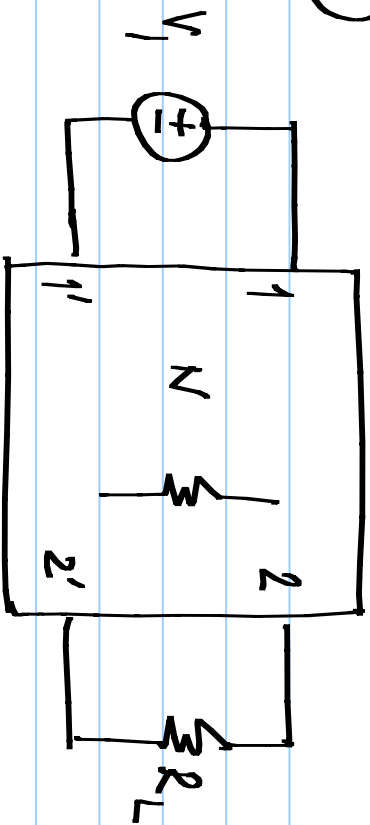
independent of R_L .

Determine P_{\max} .

Γ_L is called "reflection coefficient" of the load R_L . What is

Γ_L for (a) maximum power dissipated in R_L , (b) min. power dissipated in R_L

(7)



N consists only of resistors. The power in R_L equals 8W

When R_L is either 50Ω or 200Ω . Determine the power dissipated in R_L when $R_L = 150\Omega$.